

Write your name here

Surname

Other names

Centre Number

Candidate Number

**Edexcel GCSE**

# Geography B

## Unit 1: Dynamic Planet

**Higher Tier**

Monday 21 January 2013 – Afternoon

**Time: 1 hour**

Paper Reference

**5GB1H/01**

**You do not need any other materials.**

Total Marks

### Instructions

- Use **black** ink or ball-point pen.
- **Fill in the boxes** at the top of this page with your name, centre number and candidate number.
- In Section **A**, answer **ALL** the questions.
- In Section **B**, answer **either** question **5** or **6**.
- In Section **C**, answer **either** question **7** or **8**.
- Answer the questions in the spaces provided – *there may be more space than you need.*

### Information

- The total mark for this paper is 53.
- The marks for **each** question are shown in brackets – *use this as a guide as to how much time to spend on each question.*
- Questions labelled with an **asterisk** (\*) are ones where the quality of your written communication will be assessed.
- The marks available for spelling, punctuation and grammar are clearly indicated.

### Advice

- Read each question carefully before you start to answer it.
- Keep an eye on the time.
- Check your answers if you have time at the end.

Turn over ►

P41351A

©2013 Pearson Education Ltd.

6/8/6/6/e2



**PEARSON**

SECTION A – INTRODUCTION TO THE DYNAMIC PLANET

Answer ALL questions in this section.

Topic 1: Restless Earth

1 Study Figure 1.

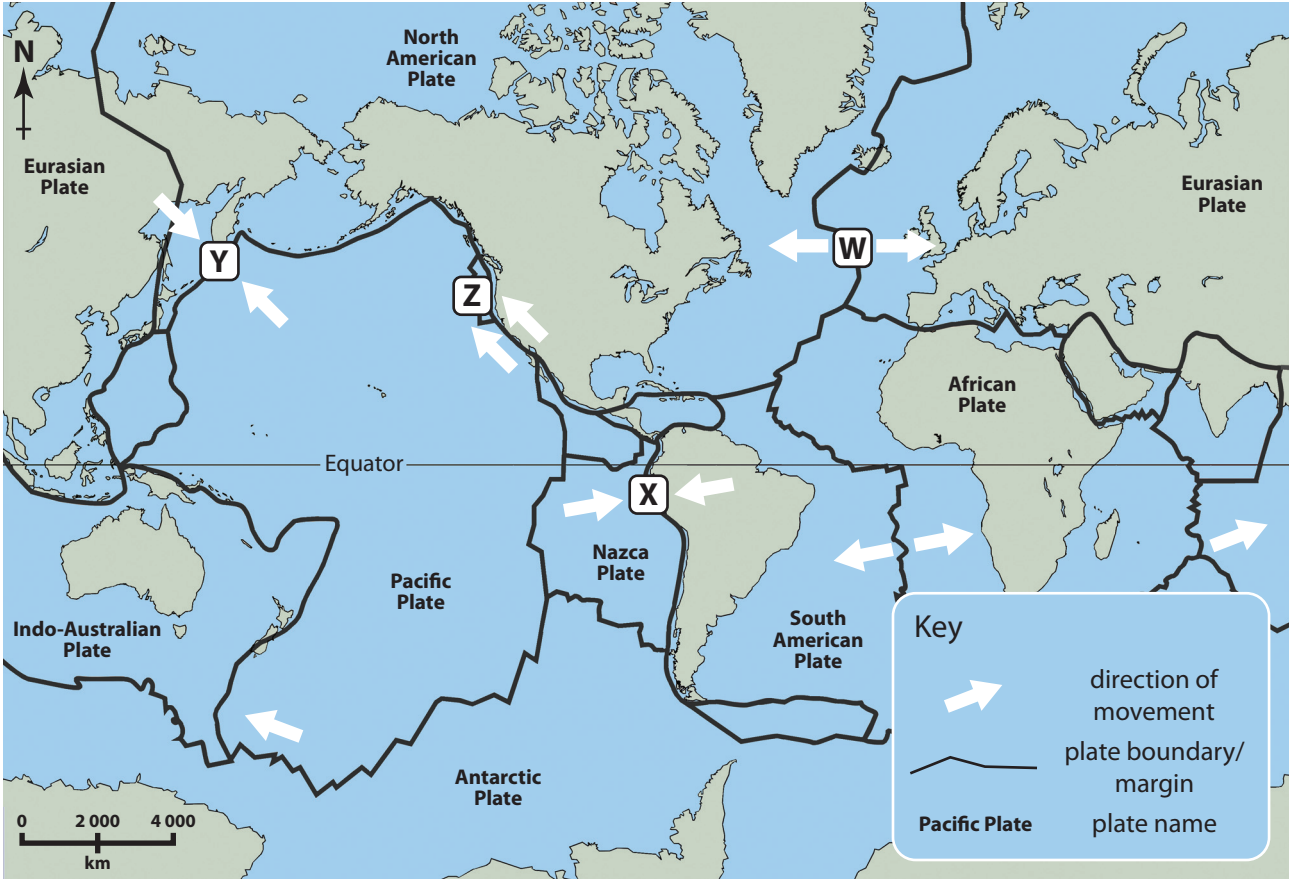


Figure 1 – A map of plate boundaries

(a) (i) Name the type of plate boundary shown at **W** on Figure 1.

(1)

(ii) Name **one** landform often found on destructive plate boundaries.

(1)



(b) Describe **one** action that can be taken to reduce the impact of future earthquakes.

(2)

.....

.....

.....

.....

(c) Explain why some earthquakes are more hazardous than others.

(4)

.....

.....

.....

.....

.....

.....

.....

.....

.....

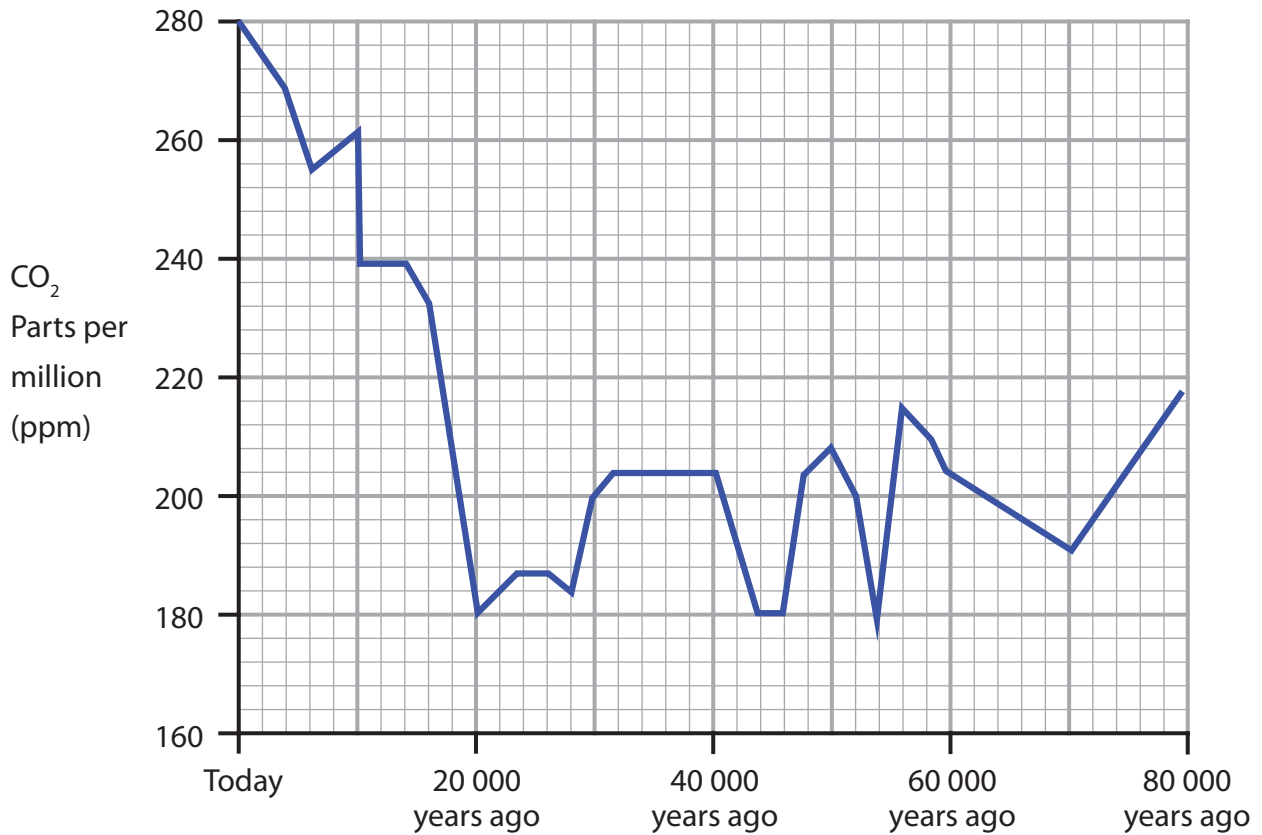
**(Total for Question 1 = 8 marks)**

---



## Topic 2: Climate and Change

2 Study Figure 2.



**Figure 2 – CO<sub>2</sub> (Carbon dioxide) change from the Vostok Ice Core**

(a) Describe the changes in CO<sub>2</sub> parts per million (ppm) shown.

(3)

.....

.....

.....

.....

.....

.....



(b) Describe **one** challenge the UK is likely to face as a result of climate change.

(2)

.....

.....

.....

.....

(c) Using an example of **past** climate change, describe its impacts.

(3)

.....

.....

.....

.....

.....

.....

.....

**(Total for Question 2 = 8 marks)**

---



### Topic 3: Battle for the Biosphere

3 Study Figure 3.

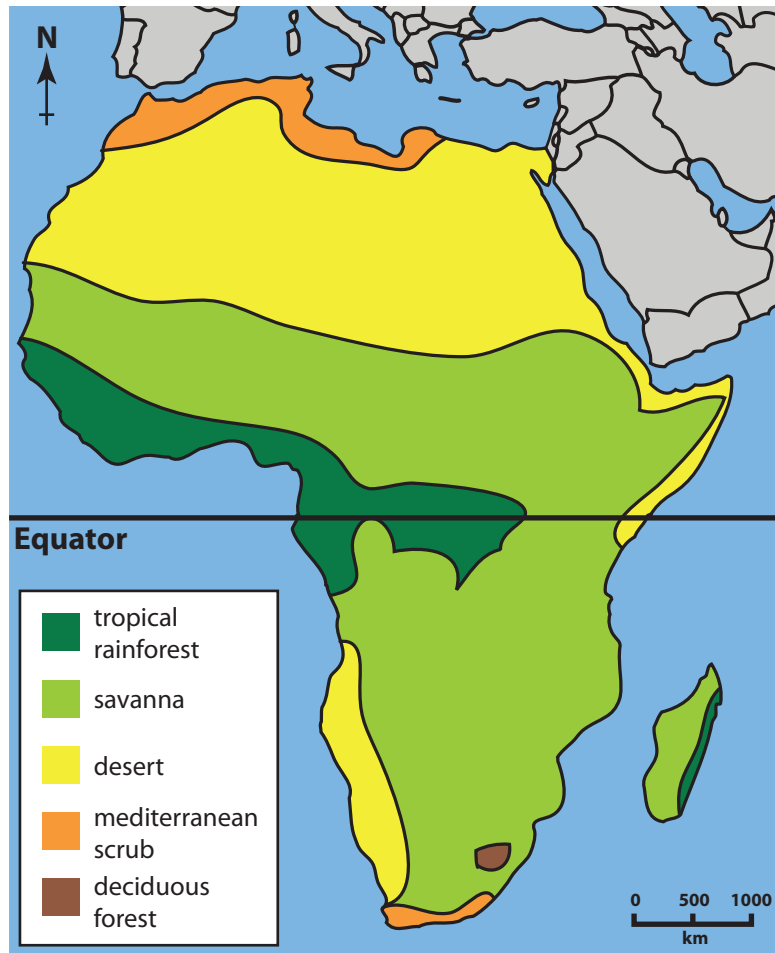


Figure 3 – A map of African biomes

(a) Describe the distribution of tropical rainforest in Africa.

(2)

.....

.....

.....

.....



(b) Describe **one** management measure used to conserve the biosphere.

(2)

.....

.....

.....

.....

(c) The atmosphere is a mixture of different gases.

Describe how the biosphere affects this mixture of gases.

(4)

.....

.....

.....

.....

.....

.....

.....

.....

.....


.....

**(Total for Question 3 = 8 marks)**



Topic 4: Water World

4 Study Figure 4.



**Figure 4 – A Pumpkin Water Tank, an example of intermediate technology**

(a) Why are small-scale projects, such as this one, usually considered to be sustainable?

(2)

.....

.....

.....

.....





(b) Describe **one** problem caused by a named large-scale water management project. (2)

Named large-scale project .....

.....

.....

.....

(c) Many areas of the world are experiencing increased aridity. Explain why this is happening. (4)

.....

.....

.....

.....

.....

.....

.....

.....

.....

**(Total for Question 4 = 8 marks)**

---

**TOTAL FOR SECTION A = 32 MARKS**



**SECTION B – SMALL-SCALE DYNAMIC PLANET**

**Answer ONE question in this section.**

**Topic 5: Coastal Change and Conflict**

**If you answer Question 5 put a cross in the box**

**5** Study Figure 5.



**Figure 5 – Groynes, an example of coastal management**

(a) Describe how groynes affect longshore drift.

You may use a diagram to help your answer.

**(3)**

.....

.....

.....

.....

.....

.....

.....



\*(b) Describe the **differences** between the features of hard and soft rock coastlines.

(6)

.....

.....

.....

.....

.....

.....

.....

.....

.....

.....

.....

.....

.....

.....

.....

.....

.....

.....

.....

.....

.....

.....

.....

**(Total for Question 5 = 9 marks)**



**Topic 6: River Processes and Pressures**

**If you answer Question 6 put a cross in the box**

**6** Study Figure 6.



**Figure 6 – A meandering river**

(a) Explain the formation of a floodplain.

You may use a diagram to help your answer.

**(3)**

.....

.....

.....

.....

.....

.....





**SECTION C – LARGE-SCALE DYNAMIC PLANET**

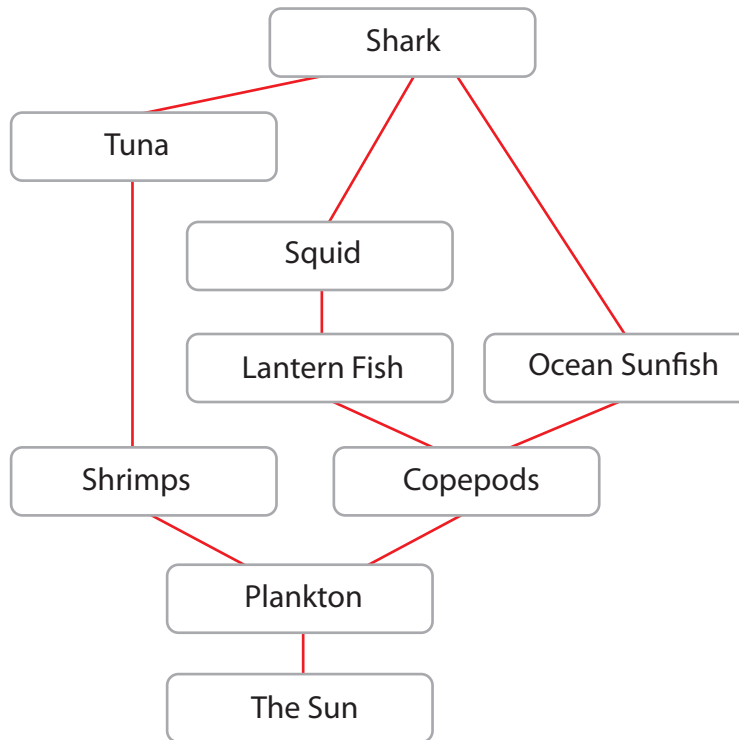
**Answer ONE question in this section.**

**Topic 7: Oceans on the Edge**

**If you answer Question 7 put a cross in the box**

**Spelling, punctuation and grammar will be assessed in \*(b).**

**7** Study Figure 7.



**Figure 7 – A marine food web**

(a) Explain why plankton is so important to the marine food web shown in Figure 7.

(3)

.....

.....

.....

.....

.....

.....



\*(b) Explain the importance of **global actions** in improving the health of oceans.

(6)

.....

.....

.....

.....

.....

.....

.....

.....

.....

.....

.....

.....

.....

.....

.....

.....

.....

.....

.....

.....

.....

.....

.....

**(Total for spelling, punctuation and grammar = 3 marks)**  
**(Total for Question 7 = 12 marks)**



## Topic 8: Extreme Climates

If you answer Question 8 put a cross in the box

Spelling, punctuation and grammar will be assessed in \*(b).

8 Study Figure 8.



**Figure 8 – Farming in extreme climates**

(a) Explain how farming has adapted to reflect the extreme climate.

(3)

Put a cross in the box to indicate your chosen extreme climate:

polar

hot arid

.....

.....

.....

.....

.....

.....







**BLANK PAGE**



**BLANK PAGE**



**BLANK PAGE**

Every effort has been made to contact copyright holders to obtain their permission for the use of copyright material. Edexcel, a product of Pearson Education Ltd. will, if notified, be happy to rectify any errors or omissions and include any such rectifications in future editions.

